




Solve each problem.


**Answers**

- 1) Which letter best shows -101?




1. \_\_\_\_\_

- 2) Which letter best shows -75?




2. \_\_\_\_\_

- 3) Which letter best shows -48?




3. \_\_\_\_\_

- 4) Which letter best shows -30?



4. \_\_\_\_\_

- 5) Which letter best shows -17?




5. \_\_\_\_\_

- 6) Which letter best shows -114?



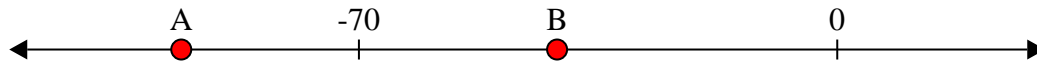
6. \_\_\_\_\_

- 7) Which letter best shows -88?




7. \_\_\_\_\_

- 8) Which letter best shows -41?



8. \_\_\_\_\_

- 9) Which letter best shows -31?



9. \_\_\_\_\_

- 10) Which letter best shows -98?




10. \_\_\_\_\_




Solve each problem.

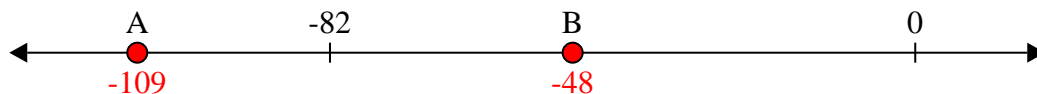
- 1) Which letter best shows -101?




- 2) Which letter best shows -75?




- 3) Which letter best shows -48?




- 4) Which letter best shows -30?




- 5) Which letter best shows -17?



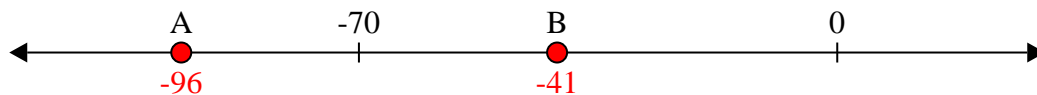
- 6) Which letter best shows -114?




- 7) Which letter best shows -88?



- 8) Which letter best shows -41?



- 9) Which letter best shows -31?



- 10) Which letter best shows -98?

**Answers**

1. **A**  
2. **A**  
3. **B**  
4. **B**  
5. **B**  
6. **A**  
7. **A**  
8. **B**  
9. **B**  
10. **A**